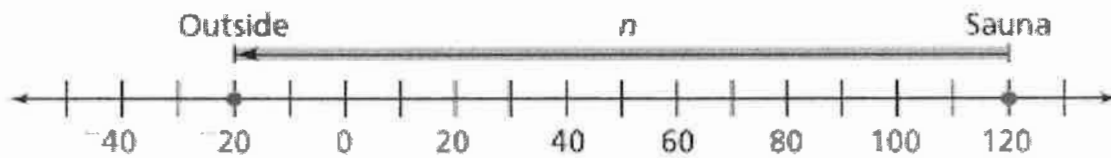
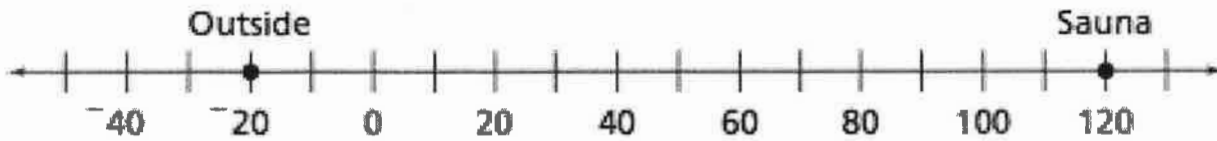


Accentuate the Negative 1.3: From Sauna to Snowbank

Name: _____ Period: _____ Date: _____

The two thermometers shown are similar to number lines. One horizontal number line can show the same information as the two thermometers.



1. What does n represent?
2. Write an **addition** number sentence that matches the number line.
3. The National Weather Service keeps records of temperature change. The world record for the fastest rise in temperature change occurred in Spearfish, South Dakota on January 22, 1943.

The temperature rose from -4°F to 45°F in two minutes.
What was the temperature change over those two minutes?



Number Sentence: _____

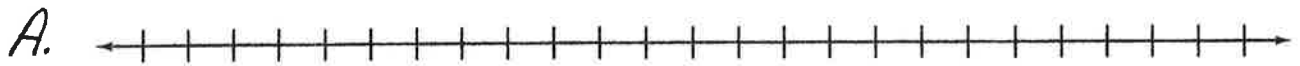
4. What is the temperature had instead dropped 10°F from -4°F ?



Number Sentence: _____

Number Lines


AN Problem 1.3 page 16



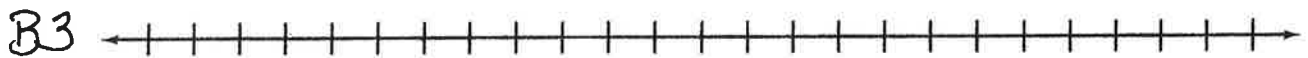
number sentence: _____



number sentence: _____



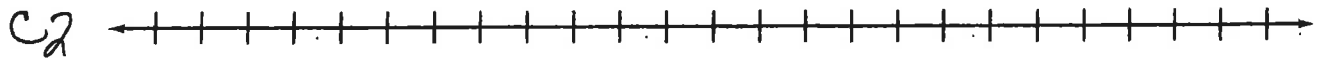
Number sentence: _____



Number sentence: _____



Number sentence: _____



Number sentence: _____



Number sentence: _____