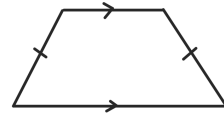


# Quadrilateral Vocabulary Practice

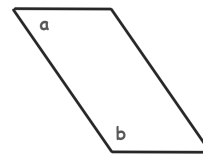
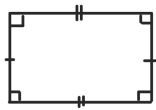
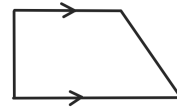
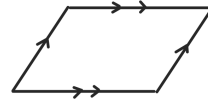
Name: \_\_\_\_\_ Date: \_\_\_\_\_

In each box, answer True /False OR write the correct vocabulary word. Be careful not to assume anything that isn't marked!

All squares are rhombuses



All rectangles are squares

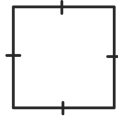


All squares are rectangles

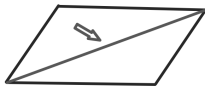
All kites are quadrilaterals



All trapezoids are parallelograms



All rectangles are parallelograms



All trapezoids are kites

